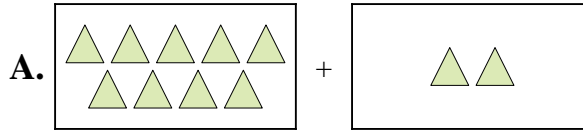




Match each addition equation to its visual equivalent.

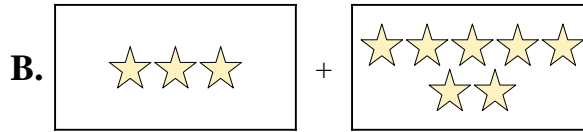
Answers

1) $6 + 9$



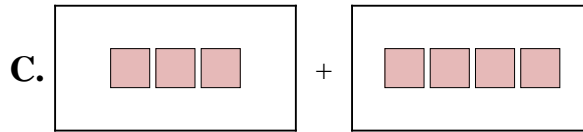
1. _____

2) $7 + 4$



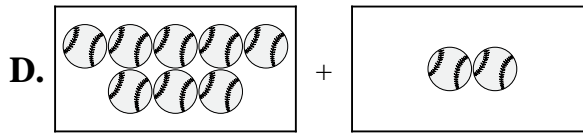
2. _____

3) $6 + 6$



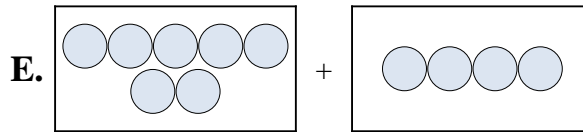
3. _____

4) $8 + 2$



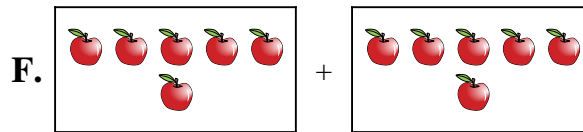
4. _____

5) $6 + 3$



5. _____

6) $9 + 10$



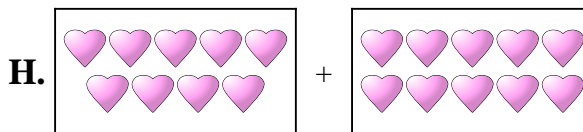
6. _____

7) $3 + 4$



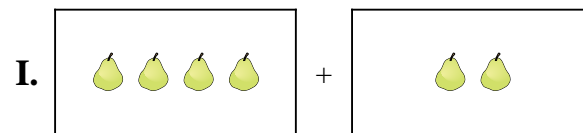
7. _____

8) $3 + 7$




8. _____

9) $4 + 2$



9. _____

10) $9 + 2$

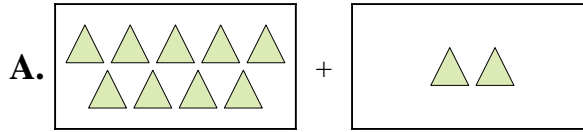


10. _____

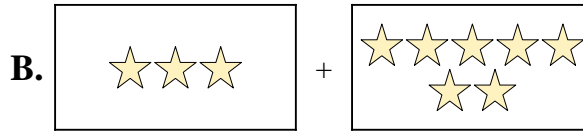


Match each addition equation to its visual equivalent.

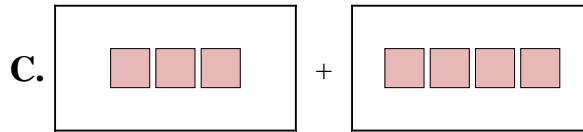
1) $6 + 9$



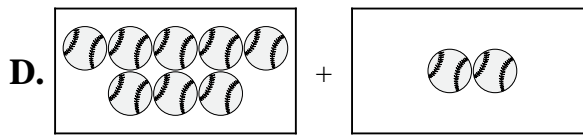
2) $7 + 4$



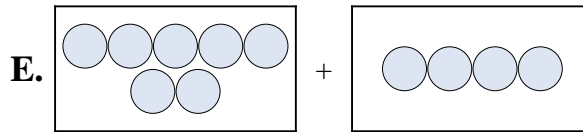
3) $6 + 6$



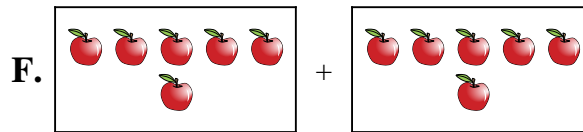
4) $8 + 2$



5) $6 + 3$



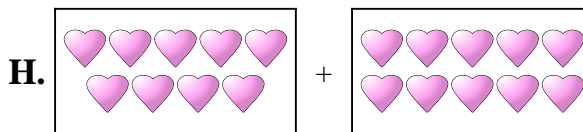
6) $9 + 10$



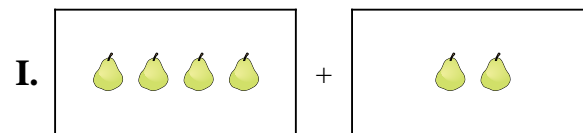
7) $3 + 4$




8) $3 + 7$



9) $4 + 2$



10) $9 + 2$



Answers

1. **J**

2. **E**

3. **F**

4. **D**

5. **G**

6. **H**

7. **C**

8. **B**

9. **I**

10. **A**